

Tfy-99.4280 Medical Imaging Methods

Problems for examination on January 14, 2009

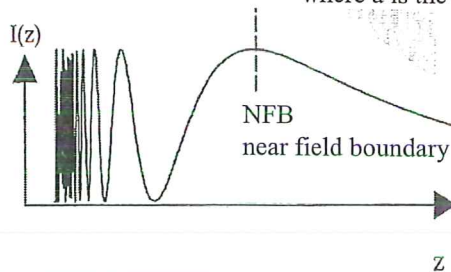
1. List all the medical imaging methods available for standard clinical use you have learned about during this course. In connection of each one name at least one inherent strength of the method based on the physical working principle or a technical solution.
2. The pressure field of a flat circular ultrasonic transducer as a function of distance from its surface can be characterized consisting of two domains: near field and far field. Describe qualitatively the difference of pressure wave patterns between them and calculate the distance of their boundary from the transducer as a function of wavelength and transducer diameter.
3. There are two modern imaging modalities which do not require using any contrast agent to simultaneously generate anatomical images of blood vessels and measure the local blood flows inside? Name the methods and describe the physical working principles they are based on.
4. Sketch the Radon transform $f(x,y) \rightarrow p(r,\phi)$ for ϕ from 0° to 360° for an object consisting of 4 thin lead rods in air arranged parallelly to z-axis and located in corners of a square. Assume the transform is registered on a film in a traditional X-ray transmission set-up.
5. Estimate the spin-lattice and spin-spin relaxation times of cerebrospinal fluid, white matter and grey matter of the brain based on the information in the attached pieces of MRI lecture material.

- **The attached selected lecture material is at your disposal**
- **You may answer in English, Finnish or Swedish**

The Beam Geometry of a Single Transducer. The simplest transducer, termed a plane-piston, is one in which the piezoelectric crystal has a flat face. The properties of the transmitted ultrasound wave can be modeled by considering the transducer to be made up of a large number of point sources, each of which emits a spherical wave. The total pressure wave is a superposition of each of these individual components. If wave propagation is in the z direction, then the on-axis, or axial, intensity $I(z)$ of the wave is given by

$$I(z) \approx 2\rho c u_z^2 \sin^2 \left[\frac{\pi}{2} \left(\frac{a^2}{z} \right) \right] \quad (3.30)$$

where a is the radius of the crystal



Construction of slice images from projections

One of the major developments in medical imaging over the past two decades has been the development of techniques for constructing images representing slices through three-dimensional objects. These techniques are called tomography (tomos = slice) and are based on the idea that an object may be constructed from *projections* of the object. That this was possible was first shown by Radon in 1917, but the method was not formally developed until the end of the 1960s.

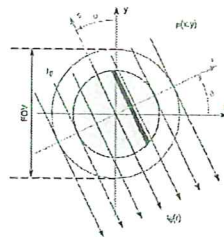
5.3.1.1 Projection and Radon Transform

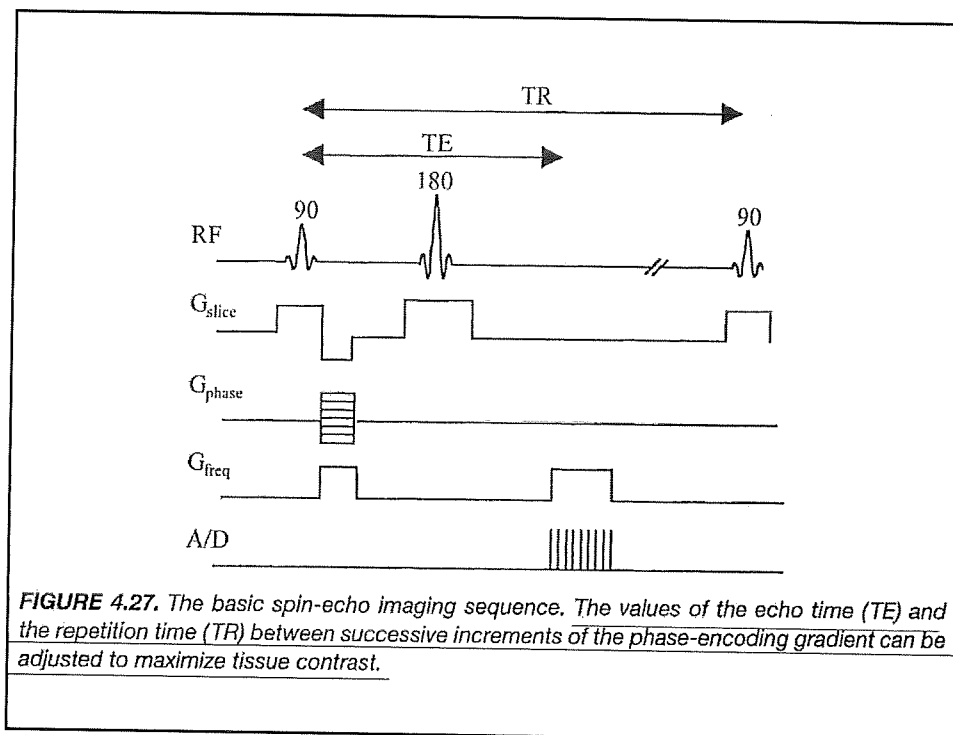
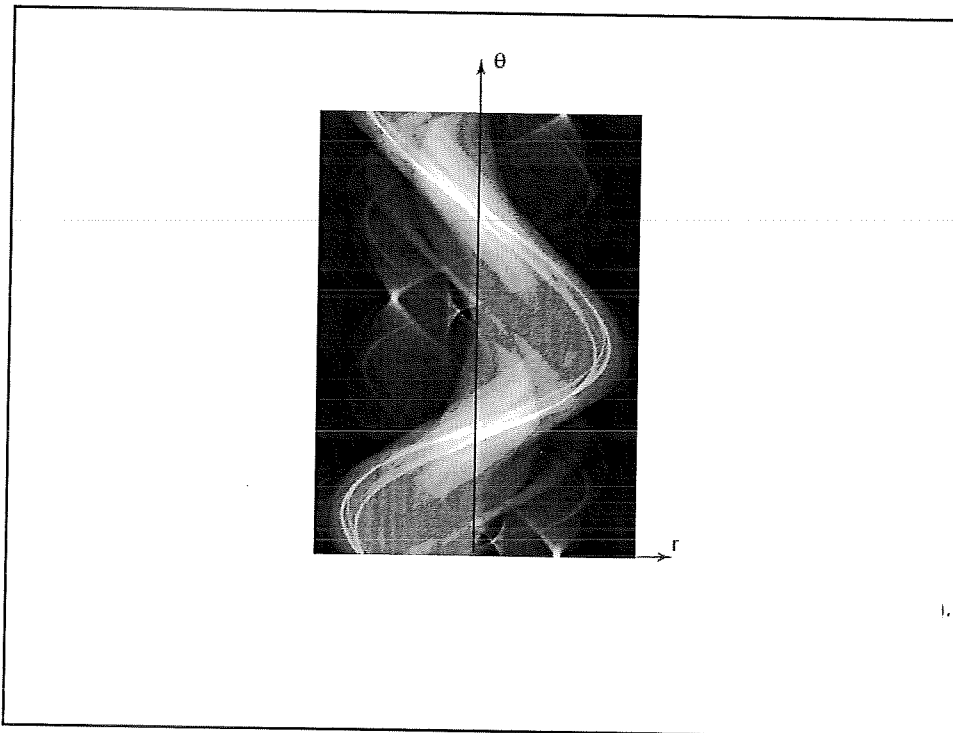
Consider the 2D parallel-beam geometry in Figure 5.5(a) in which $\mu(x, y)$ represents the distribution of the linear attenuation coefficient in the xy -plane. It is assumed that the patient lies along the z -axis and that $\mu(x, y)$ is zero outside a circular *field of view* with diameter FOV. The X-ray beams make an angle θ with the y -axis. The unattenuated intensity of the X-ray beams is I_0 . A new coordinate system (r, s) is defined by rotating (x, y) over the angle θ . This gives the following transformation formulas:

$$\begin{aligned} \begin{bmatrix} r \\ s \end{bmatrix} &= \begin{bmatrix} \cos \theta & \sin \theta \\ -\sin \theta & \cos \theta \end{bmatrix} \begin{bmatrix} x \\ y \end{bmatrix} \\ \begin{bmatrix} x \\ y \end{bmatrix} &= \begin{bmatrix} \cos \theta & -\sin \theta \\ \sin \theta & \cos \theta \end{bmatrix} \begin{bmatrix} r \\ s \end{bmatrix} \end{aligned} \quad (5.2)$$

and the Jacobian is

$$J = \begin{vmatrix} \cos \theta & -\sin \theta \\ \sin \theta & \cos \theta \end{vmatrix} = 1. \quad (5.3)$$





Instead of applying a negative dephasing gradient followed by a positive rephasing gradient, as for the gradient-echo sequence in Figure 4.20, the dephasing gradient in a spin-echo sequence is usually applied between the 90° and 180° pulses with a positive polarity. As in the spectroscopic sequence used to measure T_2 , the 180° pulse reverses the phase accumulated by the protons from, in this case, the two positive-polarity gradients.

There are time periods in the imaging sequence when no gradients or pulses are applied. These delays are introduced to give certain values to the TR and TE in order to introduce corresponding T_1 - and T_2 -contrast weighting into the image, as discussed in the next section.

4.5.2. T_1 - and T_2 -Weighted Imaging Sequences

The intensity of an axial image acquired using a spin-echo sequence is given by

$$I(x, y) \propto \rho(x, y) (1 - e^{-TR/T_1}) e^{-TE/T_2} \quad (4.53)$$

where $I(x, y)$ is the pixel intensity at each point (x, y) and $\rho(x, y)$ is the “proton density,” the number of protons at each point (x, y) . The term $1 - \exp(-TR/T_1)$ determines the “ T_1 -weighting” of the sequence, that is, the extent to which the image intensity is governed by the different T_1 values of the tissues. The value of TR can be set by the operator from the imaging console, and this value is chosen to give the best CNR between, for example, tumor and healthy tissue. If the value of TR is set to a value much greater than the T_1 of any of the tissues, then the image has no T_1 -weighting because the term $1 - \exp(-TR/T_1)$ is very close to unity for all tissues. If the value of TR is set closer to the tissue T_1 values, then the image becomes more T_1 -weighted. The concept of T_1 -weighting is shown in Figure 4.28, using values of T_1 from Table 4.2 for

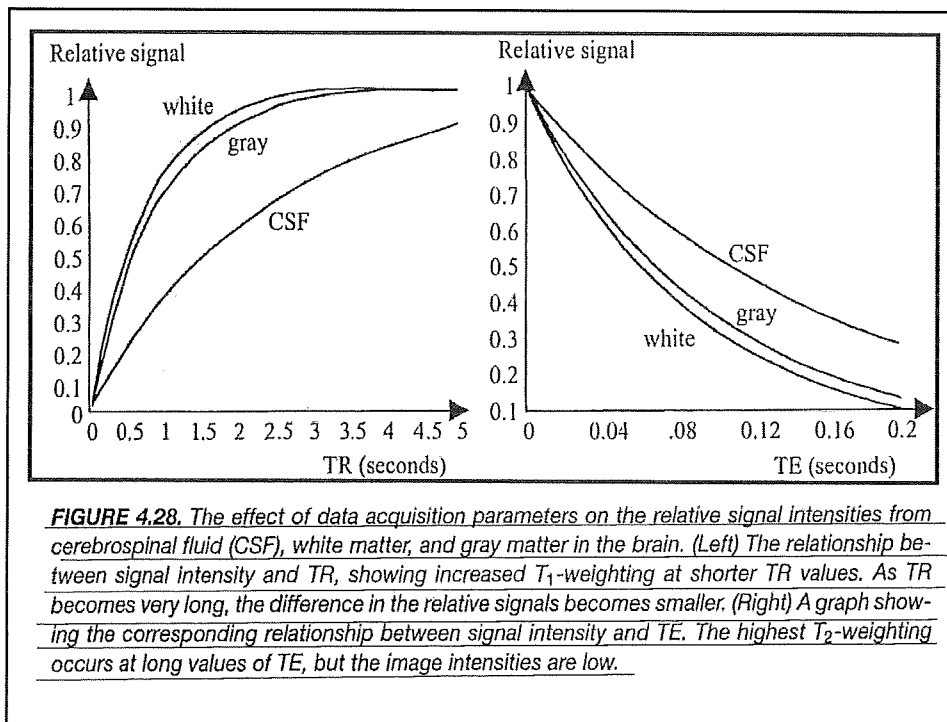


FIGURE 4.28. The effect of data acquisition parameters on the relative signal intensities from cerebrospinal fluid (CSF), white matter, and gray matter in the brain. (Left) The relationship between signal intensity and TR, showing increased T_1 -weighting at shorter TR values. As TR becomes very long, the difference in the relative signals becomes smaller. (Right) A graph showing the corresponding relationship between signal intensity and TE. The highest T_2 -weighting occurs at long values of TE, but the image intensities are low.